

1. $82 = \underline{\quad}$ tens 12 ones

(a) 8

(c) 7

(b) 10

(d) 12

2. $50 - 27 = \underline{\hspace{2cm}}$

(a) 28

(c) 13

(b) 23

(d) 20

3. Five 4's can be calculated by $\underline{\quad} + 4 + 4 + 4 + 4$

(a) 5

(c) 2

(b) 6

(d) 7

4. Write the missing term in the following sequence

16, 14, 12, _____, 8

(a) 9

(c) 8

(b) 6

(d) 1

5. How many shaded triangles are in the below shape




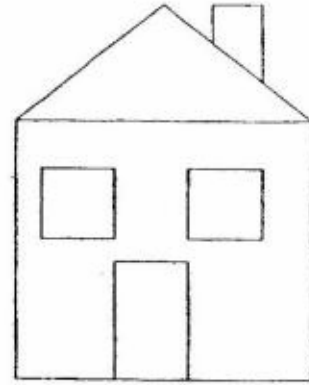
(a) Five

(c) Six

(b) Two

(d) Three

6. There were 5 kittens in the house. 2 kittens ran out of the house to play. How many kittens are left in the house?



(a) 1

(c) 2

(b) 3

(d) None

7. Susan had some fishes in her fish tank. 3 fishes died. There are 15 fishes left. How many fishes did Susan have at first?

(a) 11

(c) 10

(b) 7

(d) 18

8. In 59 what is the units' place of 9

(a) Ones

(c) zeros

(b) Tens

(d) Hundreds

9. Jessie had 10 chocolate chip cookies and 10 cream cookies. She gave 4 cookies to her friends. How many cookies does she have now?

(a) 6

(c) 7

(b) 16

(d) 19

10. How many one digit numbers are in math? Start from zero

(a) 10

(c) 9

(b) 8

(d) 6

11. 2 more than 14 is


(a) 18

(c) 16

(b) 17

(d) 15

12. Look at the pictures below. Which fruit is 2nd from the left?



Left

Right

(a) Apple

(c) banana

(b) Mango

(d) orange

13. How many number of sides in the same length in square?

(a) 3

(c) 2

(b) 4

(d) 5

14. What is the number 10 more than 8 ?


(a) 18

(c) 12

(b) 13

(d) 15

15. How many cookies are in the middle row?



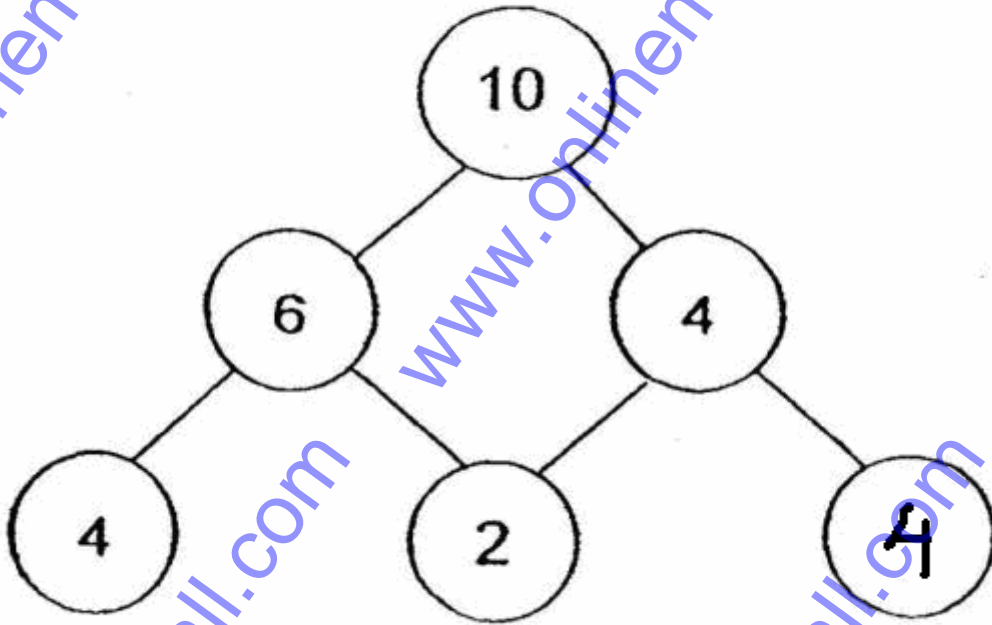
(a) 3

(c) 5

(b) 9

(d) 6

16 . How many number of 4's are in the below picture?



(a) 2

(c) 4

(b) 3

(d) 5

17. Which of the following number comes **just before** 8?

(a) 3

(c) 7

(b) 9

(d) 10

18. Which of the following gives the **smallest** answer?

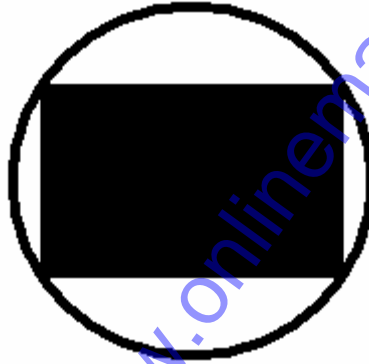
(a) $7 - 3$

(c) $8 - 1$

(b) $9 - 4$

(d) $10 - 7$

19. Name the shape of the unshaded portion




(a) Rectangle

(c) square

(b) Circle

(d) Triangle

20. Who is tallest in the below picture?



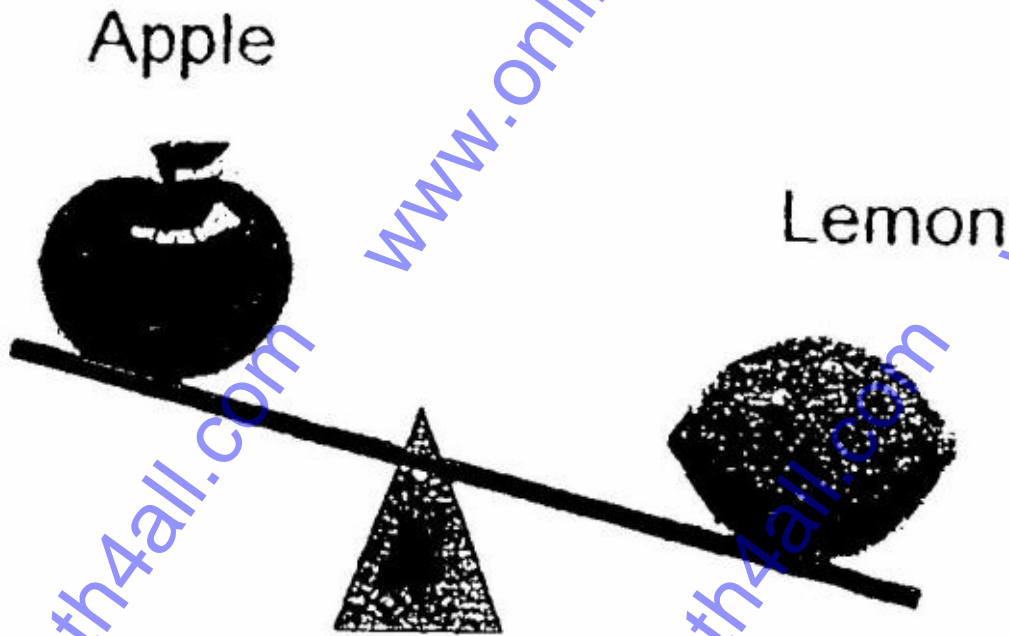
(a) Bala

(c) Dawei

(b) Elly

(d) Anna

21. Look at the picture.



The Lemon is _____ the Apple.

(a) as heavy as

(c) heavier than

(b) as light as

(d) lighter than

22. From the below numbers which is smallest?

(a) 967

(c) 697

(b) 768

(d) 695

23. How many set makes less than 10?

$$3 + 7$$

A

$$4 + 2$$

B

$$5 + 3$$

C

$$8 + 1$$

D

(a) 2

(c) 3

(b) 4

(d) 5

24. How many 3's are in 9?

(a) Eight

(c) Nine

(b) Seven

(d) two

25. Two bags bag A and bag B contains 10 balls and 15 balls respectively which bag is more weight

(a) Bag A

(c) Bag B

(b) Both

(d) None

26. Fill in the blanks.

$$2 + 4 + 6 = \underline{\hspace{2cm}}$$

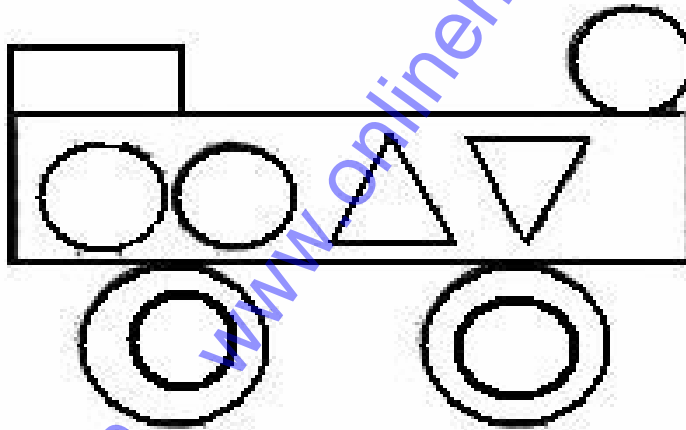
(a) 13

(c) 14

(b) 12

(d) 6

27. How many Rectangles are in the following diagram?



(a) 2

(c) 3

(b) 5

(d) 6

28. What will be the 3rd number after 8

(a) 12

(c) 11

(b) 16

(d) 13

29. In the below Four words which word contain more letters

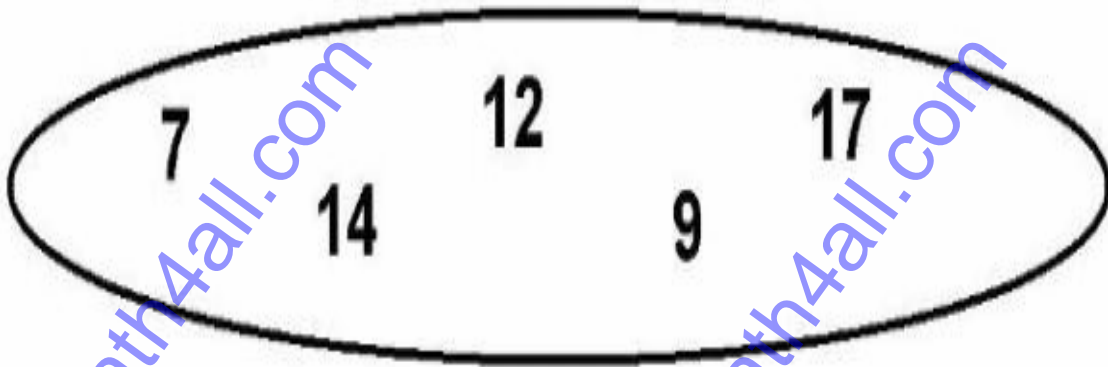
(a) REMEMBER

(c) STUDY

(b) KNOWLEDGE

(d) CALCULATION

30. How many two digit numbers are n the below picture?



(a) 5

(c) 4

(b) 3

(d) 2

31. Arrange the trees from largest?



A



B



C



D


(a) A,B,C,D

(c) B,A,C,D

(b) B,A,D,C

(d) D,A,B,C

32. Study the arrows below.



Which is the shortest arrow?

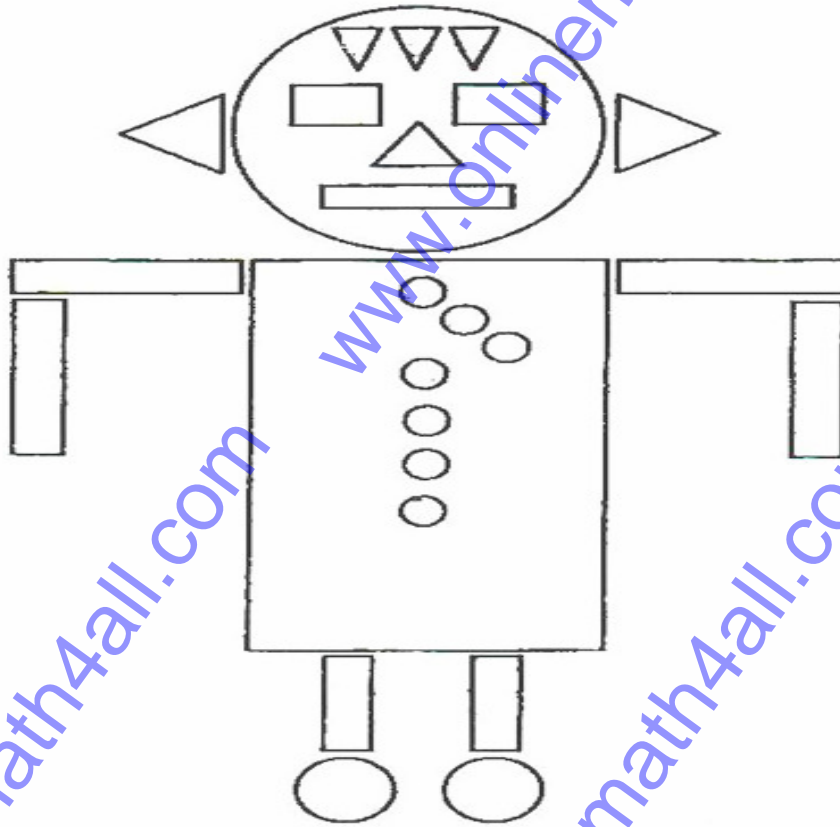
(a) P

(c) Q

(b) P and Q

(d) S

33. How many Triangles are in the below picture



(a) 6

(c) 5

(b) 10

(d) 7

34. Sam has 18 marbles. John has 7 marbles less than him.
How many marbles does John have?

(a) 12

(c) 13

(b) 11

(d) 7

35. What is the missing number?
21, 20, 19, _____, 17


(a) 8

(c) 18

(b) 20

(d) 22

36. The picture graph shows the number of dolls these 5 girls have. Who has less dolls



- (a) Sue (c) Devi
(b) Jane (d) Lili

37. Which pair of numbers makes 13?

- (a) 1 and 3 (c) 5 and 9
(b) 4 and 9 (d) 2 and 8

38. The volley ball team consists of 5 boys and 3 girls .How many number of players in the team totally

(a) 6

(c) 8

(b) 11

(d) 14

39. There are 10 ducks and cows on a farm. There are 26 legs altogether. How many cows are there?

(a) 7

(c) 5

(b) 3

(d) 1

40. Diana shares the sweets shown below with her two friends equally. How many sweets does each person get?



(a) 7

(c) 6

(b) 5

(d) 4

41. Mrs Abraham bought some prawns and crabs for \$32. She paid the fishmonger \$50. How much change did she receive?

(a) 18

(c) 15

(b) 13

(d) 17

42. Cindy is 47 years old now. Three years ago, her brother was 35 years old. What is their total age now?

(a) 8

(c) 90

(b) 89

(d) 85

43. Write down 5 coins to make 85cents.



(a) 50,20,10,5

(c) 20,50,5,5

(b) 20,20,10,10,5

(d) 5,5,10,10,50

44. Harry has 63 stickers. He has 21 more stickers than Dora.

How many stickers does Dora have?

(a) 52

(c) 32

(b) 59

(d) 42

45. How many numbers are 5 less than



(a) 2

(c) 3

(b) 7

(d) 6

46. What is the missing number?

$$15 + 16 = \underline{\quad} ?$$

(a) 35

(c) 31

(b) 30

(d) 28

47. An elephant had 4 legs.

How many legs do 5 elephants have altogether?



(a) 15

(c) 20

(b) 13

(d) 12

48. Sam gets 86 marks for a test.

Tom gets 19 fewer marks than Sam.

How many marks does Tom get?

(a) 57

(c) 77

(b) 67

(d) 87

49. What will be the number after adding 3 with 15 ?

(a) 13

(c) 14

(b) 21

(d) 18

50. How many number of mush rooms in the last row?



(a) 3

(c) 6

(b) 7

(d) 8

Answers

- | | | | | | |
|-------|-------|-------|-------|-------|-------|
| 1. c | 2. b | 3. a | 4. c | 5. d | 6. b |
| 7. d | 8. a | 9. b | 10. a | 11. c | 12. a |
| 13. b | 14. a | 15. c | 16. b | 17. c | 18. d |
| 19. b | 20. c | 21. d | 22. d | 23. c | 24. d |
| 25. c | 26. b | 27. a | 28. c | 29. d | 30. b |
| 31. a | 32. c | 33. a | 34. b | 35. c | 36. c |
| 37. b | 38. c | 39. b | 40. c | 41. a | 42. d |
| 43. a | 44. d | 45. a | 46. c | 47. c | 48. b |
| 49. d | 50. a | | | | |