

1. 3 dirty monkeys jumped into a pool. 4 smelly elephants joined them a short while later. How many animals are in the pool?

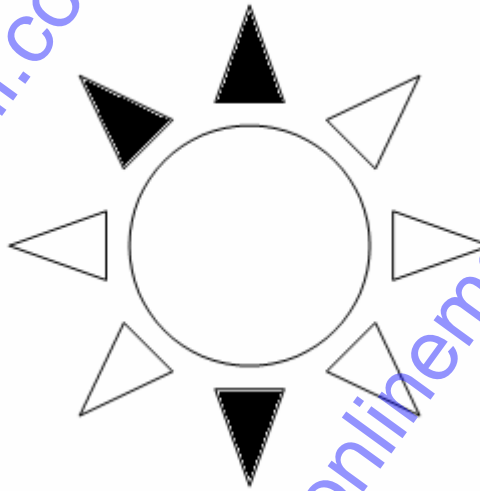
(a) 8

(c) 7

(b) 9

(d) 10

2. Smith is coloring in his drawing note how many triangles have to be colored still?



(a) Three

(c) Four

(b) Five

(d) Six

3. Add the following:

$$15 + 21 =$$

(a) 51

(c) 28

(b) 36

(d) 37

4. Add the following

$$\begin{array}{r} 0 \\ + 4 \\ \hline \square \end{array}$$

(a) 4

(c) 5

(b) 6

(d) 7

5. Johnny went to sweet stall and he purchased 10 sweets in Type A and 15 sweets in Type B. How many sweets did he buy together?

(a) 15

(c) 13

(b) 10

(d) 25

6. Complete the pattern 2,4,6,8, _____, 12

(a) 5

(c) 7

(b) 6

(d) 10

7. Susan has exam time table with three days time interval for each exam. If he has his first exam on 15th June. When will he have his next exam?

(a) 18th June

(c) 20th June

(b) 17th June

(d) 16th June

8. Willy the wily witch doctor cured 3 cancer patients, 1 heart patient and 2 blind men last Friday. How many people did he heal?

(a) Two

(c) Six

(b) Four

(d) Five

9. A mother has bought 12 cakes for her children and she wants to give her children equally. Then how many cakes will each child get if she has two children?

(a) 8

(c) 6

(b) 2

(d) 5

10. What is the 6th term in the below picture?

A

B

C

D

E

F

G

(a) E

(c) F

(b) D

(d) C

11. How many steps are here?




(a) 5

(c) 1

(b) 4

(d) 3

12 . How many candles are in same size in the self?



(a) 4

(c) 5

(b) 7

(d) 6

13. Oman wants to prepare omelet. One omelet needs two eggs then how many omelets will he prepare with these eggs?



(a) 1

(c) 2

(b) 5

(d) 3

14. Mary has two cows in her house. Cow A 2 liter milk per day and Cow B will give 5 liter milk per day. How many more liters that cow B is giving than Cow A ?


(a) 2

(c) 4

(b) 3

(d) 5

15. There are some shirts with matching trousers. Then how many shirts are left extra?



(a) 2

(c) 6

(b) 3

(d) 4

16. What time does the clock show?




(a) 11

(c) 11.10

(b) 11.05

(d) 11.20

17. How many pine apples in the first row?



(a) Three

(c) Four

(b) Five

(d) Six

18. Subtract the following

$$\begin{array}{r} 9 \\ - 4 \\ \hline \square \end{array}$$

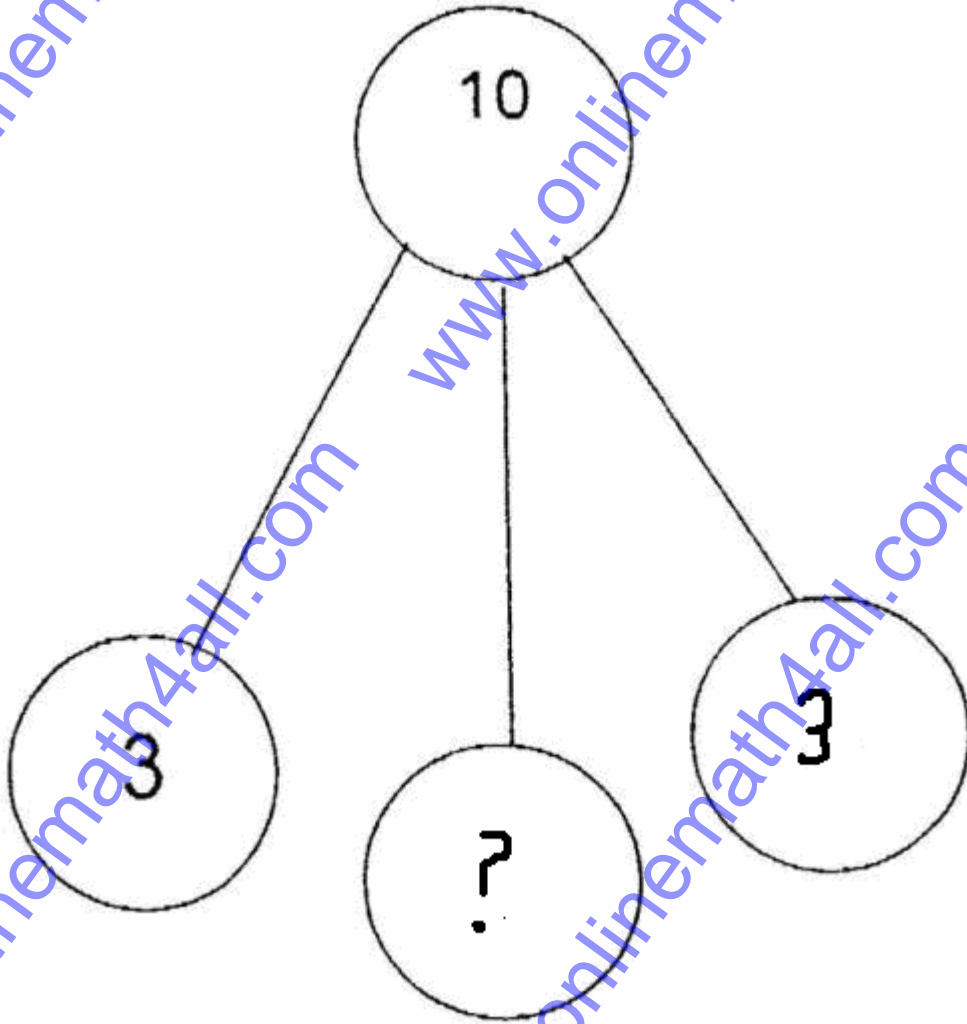
(a) 13

(c) 18

(b) 5

(d) None

19. Fill in the missing number to complete the number bond.



(a) 3

(c) 4

(b) 2

(d) 5

20. Which of the following is correct?

(a) $19 > 25$

(c) $19 < 25$

(b) $19 = 25$

(d) None of these

21. Rocky purchased some provision from shop and he gave \$10 to the shop keeper and the shop keeper gave \$2 remaining then how much did rocky purchased?

(a) 5

(c) 12

(b) 16

(d) 8

22. _____ - 70 = 110

(a) 160

(c) 170

(b) 180

(d) 190

23. Ronald gives \$5 to one friend and \$3 to another friend. Then how much did he give for both the friends' altogether?

(a) 8

(c) 7

(b) 9

(d) 5

24. Linda arranges her 10 books in self .If she has two rows .Then many books does each self carry?


(a) 7

(c) 3

(b) 8

(d) 5

25. How many circles are in the below picture?



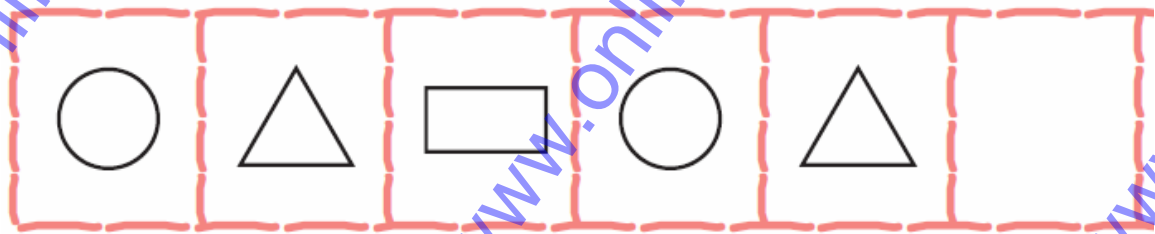
(a) Two

(c) Three

(b) Five

(d) Four

26. What will be the next shape?




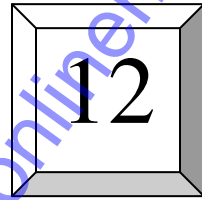

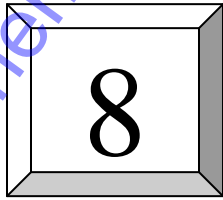
(a) Circle

(c) Triangle

(b) Rectangle

(d) None of these

27. Which is the biggest number?




(a) 8

(c) 12

(b) 21

(d) 15

28. How many leaf will be in the next box?



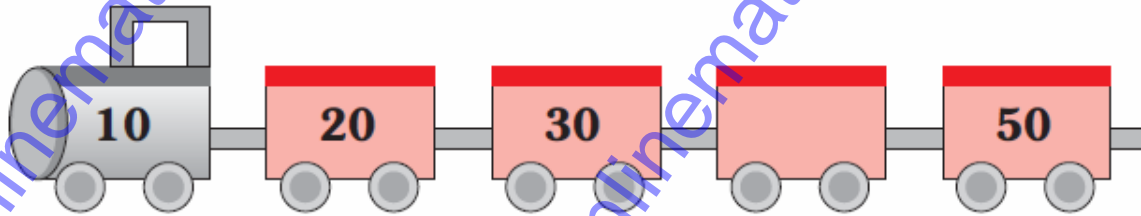
(a) 8

(c) 7

(b) 5

(d) 6

29. What will be the next number?



(a) 40

(c) 50

(b) 60

(d) 70

30. If I subtract 51 from 58, what will I get?

(a) 8

(c) 7

(b) 4

(d) 6

31. _____ + 10 = 75 what is the missing number in the sentence above?

(a) 65

(c) 58

(b) 54

(d) 53

32. How many match stick in the below picture?



(a) 5

(c) 3

(b) 6

(d) 12

33. Look at the picture below. How many things are in the shape of Rectangle?



mirror



clock



shirt




Photo frame



ball



sign

(a) 3

(c) 2

(b) 6

(d) 4

34. Which bag contains more money?



(a) Both are same

(c) Second

(b) First

(d) None of these

35. If we interchange the digits of the number "25" what number will we get?


(a) 35

(c) 37

(b) 27

(d) 52

36. What is the relation ship between these two ladders?



- (a) First is taller than second (c) second is taller than First
(b) Both are in same size (d) None of these

37. If one ice cream cost \$5. Then what is the total price of these two ice creams?



- (a) Ten (c) Five
(b) Six (d) Seven

38. What is the next number of 79

(a) 81

(c) 51

(b) 60

(d) 80

39. Which of the following word contains 4 letters?

(a) BUY

(c) BRING

(b) TAKE

(d) POWER

40. Which of the following will give the sum of 6?

(a) $2+9$

(c) $5+1$

(b) $3+8$

(d) $4+3$

41. What will be the next number after 87 ?

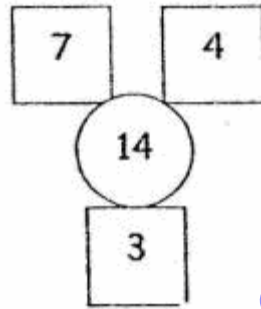
(a) 88

(c) 98

(b) 100

(d) 89

42. How many numbers totally we have in the below picture?



(a) 7

(c) 14

(b) 4

(d) 3

43. Sam needs to buy 7 more pencils to reach 10 pencils. Then how many pencils does he have already?

(a) 5

(c) 3

(b) 8

(d) 4

44. If A denotes the number 11, B denotes the number 12 then what is the value for c?

(a) 21

(c) 13

(b) 11

(d) 14

45. How many chairs are in the below picture?




(a) 5

(c) 4

(b) 6

(d) 7

46. Count the number of balloons and write the number in words




(a) Five

(c) Eight

(b) Two

(d) Three

47. How many sides does the following shape have?



(a) Four

(c) Five

(b) Six

(d) Seven

48. How many letters does the word "ELEPHANT" contains?

(a) 17

(c) 10

(b) 15

(d) 8

49. Kevin is reading 2 pages per hours. Then how long will it take to complete 6 pages?

(a) 7

(c) 6

(b) 3

(d) 5

50. In the following number which is greater

(a) 11

(c) 13

(b) 15

(d) 14

Answers

1. c	2. b	3. b	4. a	5. d	6. d
7. a	8. c	9. c	10. c	11. d	12. d
13. c	14. b	15. a	16. b	17. c	18. b
19. c	20. c	21. d	22. b	23. a	24. d
25. d	26. b	27. b	28. c	29. a	30. c
31. c	32. c	33. c	34. b	35. d	36. c
37. a	38. d	39. b	40. c	41. a	42. b
43. c	44. c	45. c	46. d	47. a	48. d
49. b	50. b				